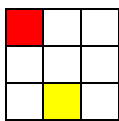


## ALAPMŰVELETEK

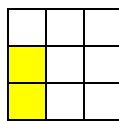
Oldd meg a feladatokat!  
Keresd meg az eredményt a mellékelt négyzetrácson.  
Színezd ki a 3 x 3 – as részeket a feladathoz tartozó módon.

Milyen alakzatot kaptál?

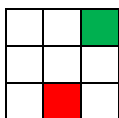
65894	2687088	3350052
1397160	56478	283664
457893	98654	806344
589632	4612629	45896



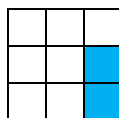
$35\,458 \cdot 8 =$



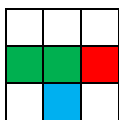
$826\,128 : 18 =$



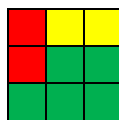
$58\,215 \cdot 24 =$



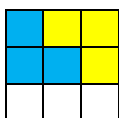
$2\,358\,528 : 4 =$



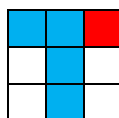
$7\,548 \cdot 356 =$



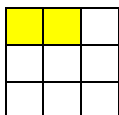
$5\,919\,240 : 60 =$



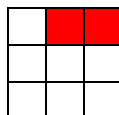
$658\,947 \cdot 7 =$



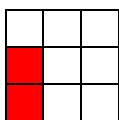
$508\,302 : 9 =$



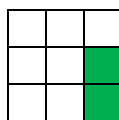
$847 \cdot 952 =$



$3\,205\,251 : 7 =$



$93\,057 \cdot 36 =$



$395\,364 : 6 =$

Megoldás:

