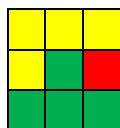
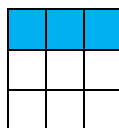


Végezd el a szorzásokat! Keresd meg az eredményt az alábbi négyzetrácson. Színezd ki a 3 x 3 – as részeket a feladathoz tartozó módon. Milyen alakzatot kaptál?

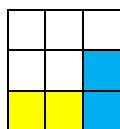
|           |        |         |         |           |         |
|-----------|--------|---------|---------|-----------|---------|
| 1 457     | 3 789  | 53 610  | 523 428 | 1 068 720 | 285 421 |
|           |        |         |         |           |         |
| 162 378   | 1 008  | 169 398 | 196 544 | 276 528   | 3 648   |
|           |        |         |         |           |         |
| 1 156 287 | 12 054 | 64 526  | 34 500  | 3 370     | 67 542  |
|           |        |         |         |           |         |



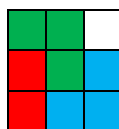
$24\,568 \cdot 8 =$



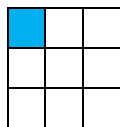
$123 \cdot 98 =$



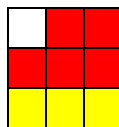
$8935 \cdot 6 =$



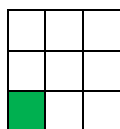
$6584 \cdot 42 =$



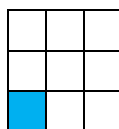
$9218 \cdot 7 =$



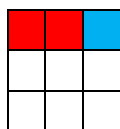
$9021 \cdot 18 =$



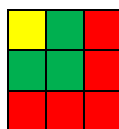
$356\,240 \cdot 3 =$



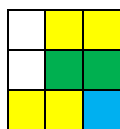
$57 \cdot 64 =$



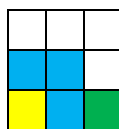
$674 \cdot 5 =$



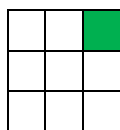
$6\,274 \cdot 27 =$



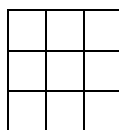
$28 \cdot 36 =$



$9\,876 \cdot 53 =$



$460 \cdot 75 =$



Minden más szám.

ALAPMŰVELETEK

|           |  |        |  |         |  |         |  |           |  |         |  |  |  |
|-----------|--|--------|--|---------|--|---------|--|-----------|--|---------|--|--|--|
|           |  |        |  |         |  |         |  |           |  |         |  |  |  |
| 1 457     |  | 3 789  |  | 53 610  |  | 523 428 |  | 1 068 720 |  | 285 421 |  |  |  |
|           |  |        |  |         |  |         |  |           |  |         |  |  |  |
|           |  |        |  |         |  |         |  |           |  |         |  |  |  |
| 162 378   |  | 1 008  |  | 169 398 |  | 196 544 |  | 276 528   |  | 3 648   |  |  |  |
|           |  |        |  |         |  |         |  |           |  |         |  |  |  |
| 1 156 287 |  | 12 054 |  | 64 526  |  | 34 500  |  | 3 370     |  | 67 542  |  |  |  |
|           |  |        |  |         |  |         |  |           |  |         |  |  |  |