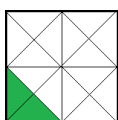
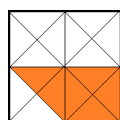


Végezd el az osztásokat! Keresd a mellékelt rácson a hányadosokat és színezd ki a feladat mellett megadott módon. Milyen alakzatot kapszál?

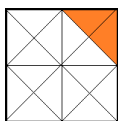
5629	4251	1336	1436	9827
1234	9876	9287	3971	7542
9687	3568	2658	4250	5687
7452	5786	1354	3565	1324
7541	1332	4856	6210	9826



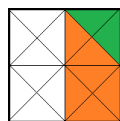
$17\ 232 : 12 =$



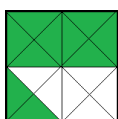
$78\ 806 : 14 =$



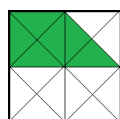
$132\ 016 : 37 =$



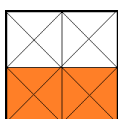
$286\ 504 : 59 =$



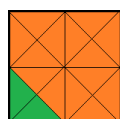
$248\ 886 : 33 =$



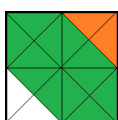
$136\ 488 : 24 =$



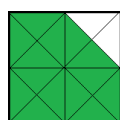
$260\ 036 : 28 =$



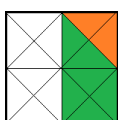
$85\ 056 : 32 =$



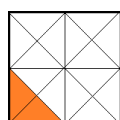
$60\ 930 : 45 =$



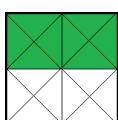
$51\ 623 : 13 =$



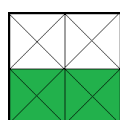
$80\ 210 : 65 =$



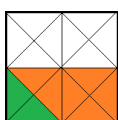
$111\ 780 : 18 =$



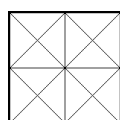
$106\ 250 : 25 =$



$530\ 658 : 54 =$



$108\ 636 : 11 =$



Minden egyéb szám.

