


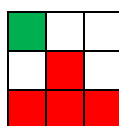
Oldd meg a feladatokat!
Keress meg az eredményt a
mellékelt négyzetrácson.
Színezd ki a 3 x 3 – as részeket a
feladathoz tartozó módon.

Milyen alakzatot kaptál?

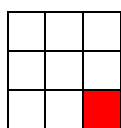
	8	6	9	1		5	2	4	3		3	9	2	5
	5	7	1	2		7	4	8	1		4	2	9	7
	4	6	8	9		5	6	9	8		9	8	2	4
	7	8	9	5		2	4	8	2		4	8	5	9
	6	8	2	4		8	4	1	6		9	5	4	3



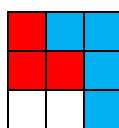
$113\,960 : 20 =$




$235\,500 : 60 =$



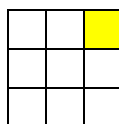
$171\,360 : 30 =$



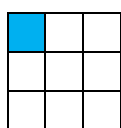
$198\,560 : 80 =$



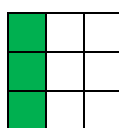
$209\,720 : 40 =$




$204\,720 : 30 =$



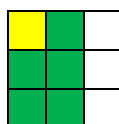
$291\,540 : 60 =$




$884\,160 : 90 =$



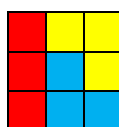
$214\,850 : 50 =$




$589\,120 : 70 =$



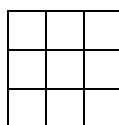
$315\,800 : 40 =$



$374\,050 : 50 =$



$328\,230 : 70 =$



Minden más szám.

ALAPMŰVELETEK

8691			5243				3925		
5712			7481				4297		
4689			5698				9824		
7895			2482				4859		
6824			8416				9543		