


ALAPMŰVELETEK

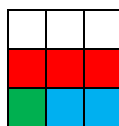
Oldd meg a feladatokat!
Keress meg az eredményt a mellékelt négyzetrácson. Színezd ki a 3 x 3 – as részeket a feladathoz tartozó módon.

Milyen alakzatot kaptál?


543872	1358962	587158	350682	491058
578492	1291625	678459	874293	540321
679348	854297	784596	129874	452806
453917	356897	1281035	587063	1358062



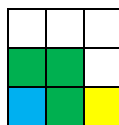
$6\ 458\ 125 : 5 =$




$6\ 994\ 344 : 8 =$



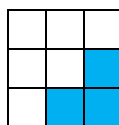
$3\ 241\ 926 : 6 =$



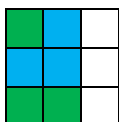
$9\ 512\ 734 : 7 =$



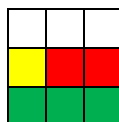
$3\ 417\ 188 : 4 =$



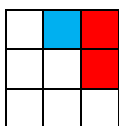
$1\ 631\ 616 : 3 =$



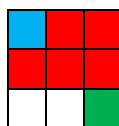
$1\ 168\ 866 : 9 =$




$1\ 356\ 918 : 2 =$



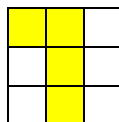
$4\ 627\ 936 : 8 =$



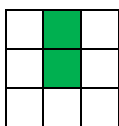
$5\ 492\ 172 : 7 =$



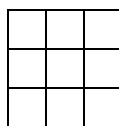
$3\ 212\ 073 : 9 =$



$2\ 716\ 836 : 6 =$



$2\ 935\ 315 : 5 =$



Minden más szám.

