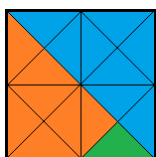
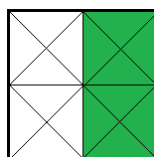


A feladatok melletti ábra szerint színezd ki azt a mezőt, ahol a megoldást talárod!
Mit ábrázol a kép?

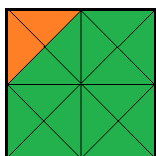
(-36)	(-9)	(+4)	(-80)
(-57)	(+44)	(+58)	(+5)
(+65)	(+16)	(-19)	(-29)
(-72)	(+40)	(-13)	(-54)
(-14)	(-58)	(+45)	(+41)



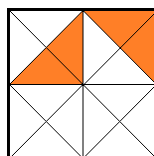
$$(-49) + (+36) =$$



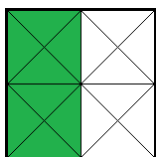
$$(+28) - (+37) =$$



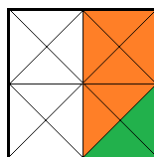
$$(+18) - (-27) =$$



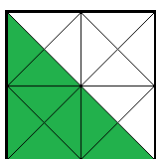
$$(-36) + (-21) =$$



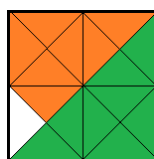
$$(+52) + (-48) =$$



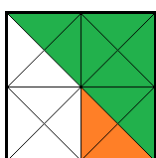
$$(-27) - (+31) =$$



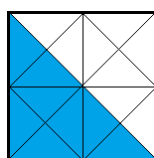
$$(-12) + (+53) =$$



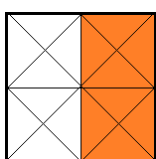
$$(+15) - (-29) =$$



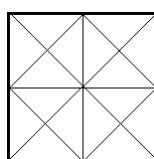
$$(+48) + (-32) =$$



$$(-43) - (-24) =$$



$$(+27) + (+13) =$$



az összes többi

Megoldás

