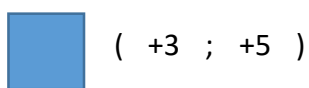
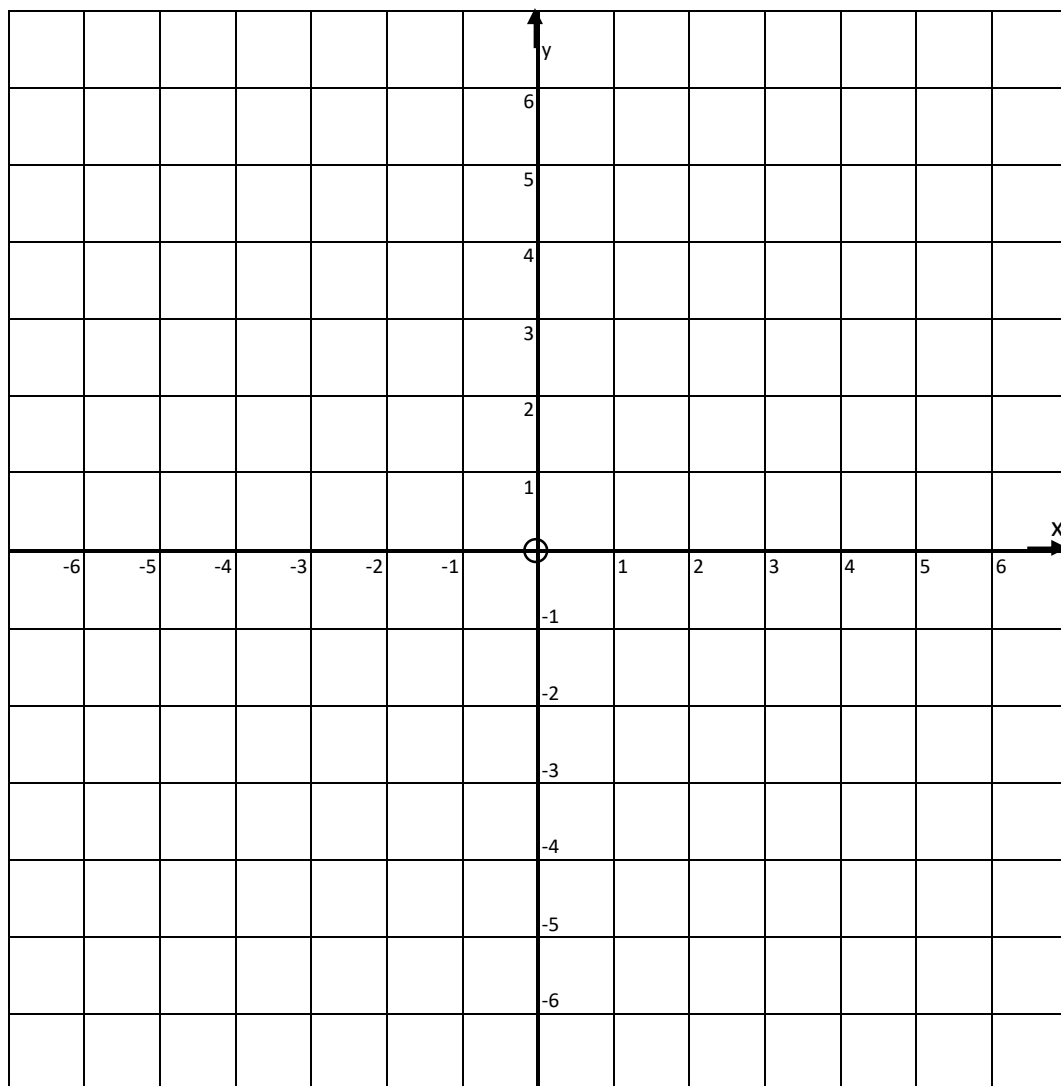
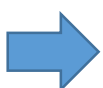


Rajzold be az alakzatokat a megadott helyre!



( +3 ; +5 )



( -5 ; -2 )



( -5 ; +4 )



( -2 ; -4 )



( +4 ; 0 )



( -4 ; +5 )



( +3 ; +2 )



( -6 ; -6 )



( -1 ; +6 )



( +5 ; +3 )



( +5 ; +2 )



( 0 ; 0 )



( 0 ; -4 )



( +3 ; -5 )



( +1 ; 0 )