

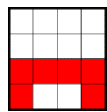
TIZEDESTÖRTEK ÉRTELMEZÉSE

Melyik számra gondoltunk?

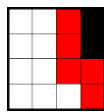
Keresd meg a 4x4-es rácson a számot és színezd ki a leírás melletti módon!

Milyen alakzatot kaptál?

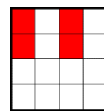
60,48	80,3006	602,6	0,36	0,137	8,9004
75,0608	70,89	3,48	302,509	9,7	40,128
9,099	6,004	602,07	0,6007	0,036	4,06
80,036	200,8	58,023	0,713	257,8	602,06
200,08	6,809	1,705	302,059	3,568	0,5047



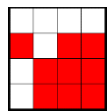
3 egyes + 4 tized + 8 század =




7 tízes + 5 egyes + 6 század + 8 tized =



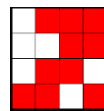
6 ezred + 5 tized + 3 egyes + 8 század =



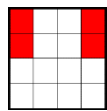
4 ezred + 6 egyes =



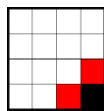
6 ezred + 3 század =



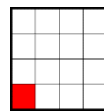
2 század + 8 tized =



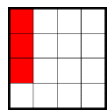
9 ezred + 8 tized + 6 egyes =



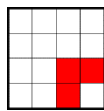
4 tized + 6 tízes + 8 század =




8 tízes + 3 tized + 6 tized =




8 tized + 7 tízes + 9 század =



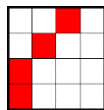
2 egyes + 3 század + 9 ezred + 5 tized =



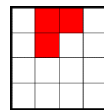
2 egyes + 6 század + 7 század =



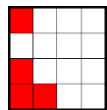
7 tized + 3 ezred + 1 század =



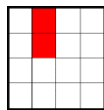
4 egyes + 6 század =



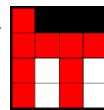
7 tized + 1 egyes + 5 ezred =




2 egyes + 6 század + 6 század =



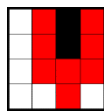
7 tized + 5 tized + 4 ezred =



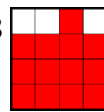
2 század + 3 ezred + 5 tízes + 8 egyes =




9 tized + 8 egyes + 4 tized =



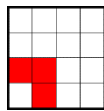
2 század + 4 tízes + 8 ezred + 1 tized =



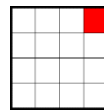
6 tized + 7 tized =



2 század + 8 tized + 7 egyes + 5 tízes =



9 egyes + 7 tized =



9 egyes + 9 ezred + 9 század =

Megoldás

