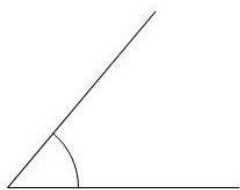


Nevezd el a szögeket a görög betűkkel! Hány fokosak a szögek?


1.



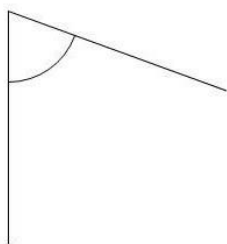
2.



3.




4.



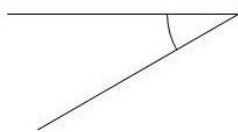
5.




6.



7.



8.



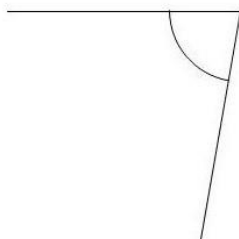
9.




10.




11.




12.



13.



14.



15.

